

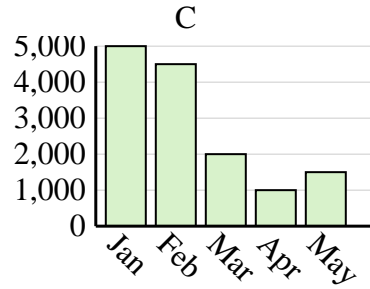
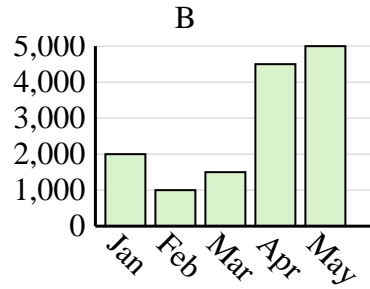
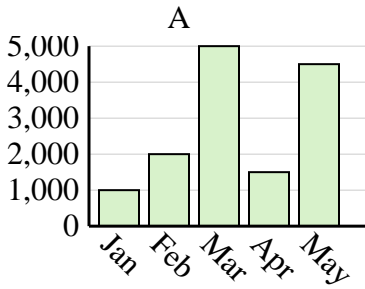


Determine which graph (A, B or C) best represents the information in the table.

Answers

1)

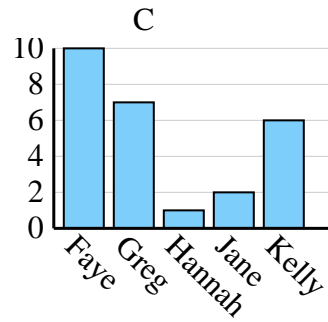
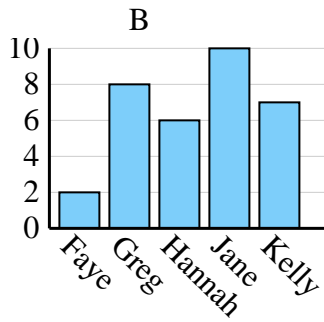
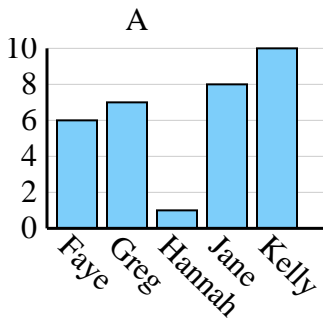
Sales	Jan	Feb	Mar	Apr	May
Month	5,000	4,500	2,000	1,000	1,500



1. _____
2. _____
3. _____
4. _____

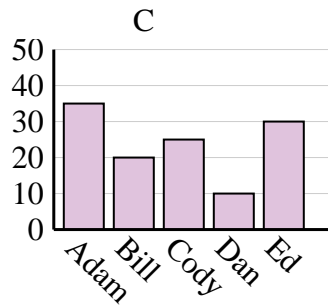
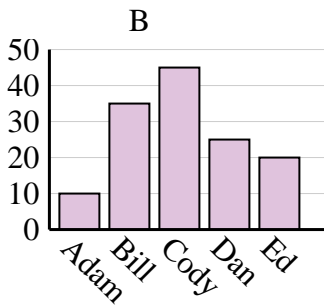
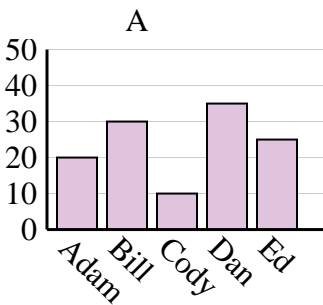
2)

Name	Faye	Greg	Hannah	Jane	Kelly
States Lived In	6	7	1	8	10



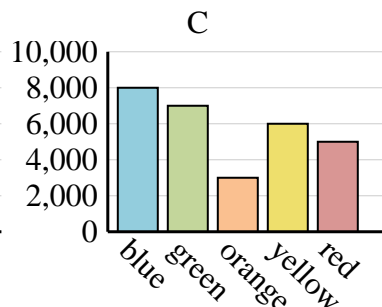
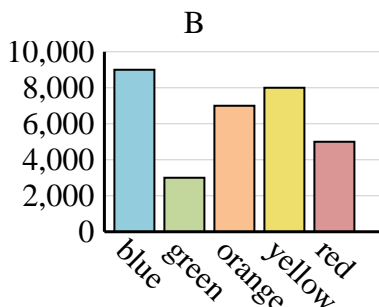
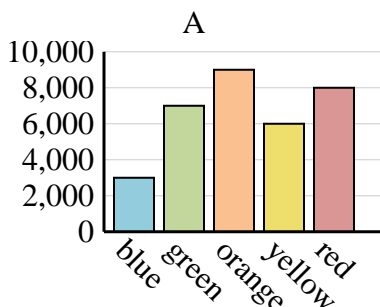
3)

Name	Adam	Bill	Cody	Dan	Ed
Points	10	35	45	25	20



4)

Favorite Color	blue	green	orange	yellow	red
People	8,000	7,000	3,000	6,000	5,000

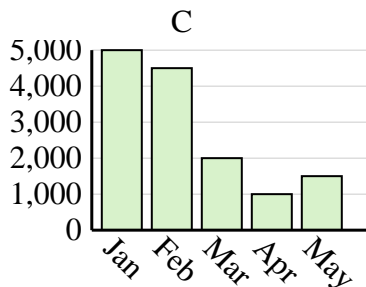
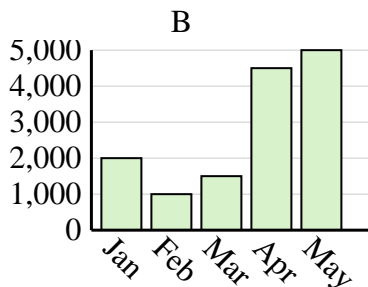
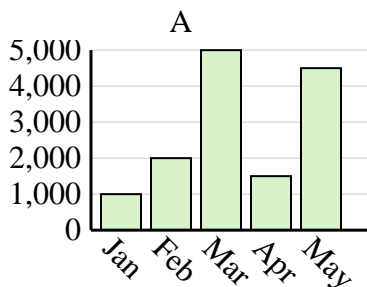




Determine which graph (A, B or C) best represents the information in the table.

Answers

Sales	Jan	Feb	Mar	Apr	May
Month	5,000	4,500	2,000	1,000	1,500



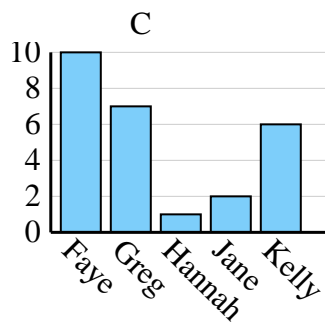
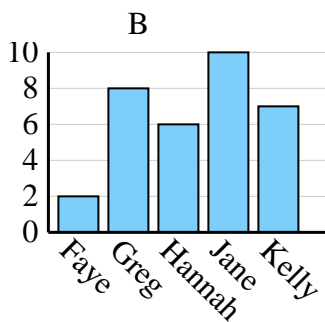
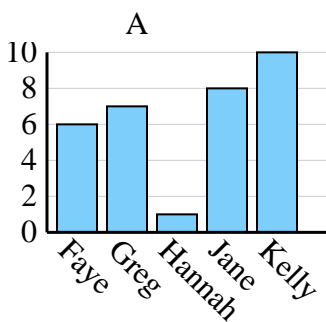
1. **C**

2. **A**

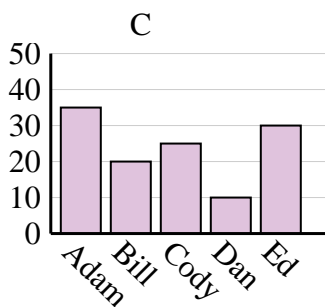
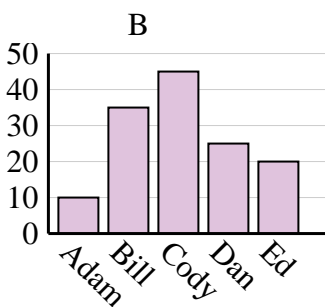
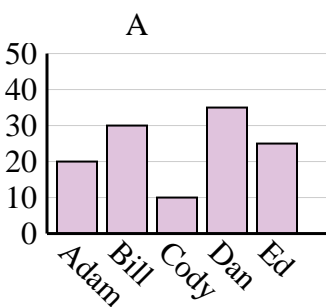
3. **B**

4. **C**

Name	Faye	Greg	Hannah	Jane	Kelly
States Lived In	6	7	1	8	10



Name	Adam	Bill	Cody	Dan	Ed
Points	10	35	45	25	20



Favorite Color	blue	green	orange	yellow	red
People	8,000	7,000	3,000	6,000	5,000

